



GOOD TIMES INFANT SCHOOL – KAWAALA

SET II REVISION WORK 2020

PRIMARY THREE LITERCAY I B

NAME _____ **STREAM** _____

1. We live in a country called? _____

2. Name the person who heads an urban council.


3. In which district is your school found?

4. How many divisions make up Kampala?

5. In which divisions is your school found?

6. What is a village?

7. Draw a map of tree below.



8. Which element is used to show direction on a map?

9. Who is the president of Uganda?

10. Write L.C in full.

11. From which direction does the sun rise?

12. Which is the biggest hospital in Uganda?

13. On which hill do we find Makerere University?

14. Name the highest mountain in Uganda.

15. Give any one use of swamps to man.

16. Name any one man-made lake in Uganda.

17. Write any one example of a hill in your area.

18. What is the capital city of Uganda?

19. How do we call the four major points of a compass direction?

20. From which lake do we get salt from?

21. Name the staple food for Baganda.

22. Name any one type of fish caught in your sub county.

23. Name the biggest ethnic group.

24. Who chairs the village meetings?

25. Who gives a name to a new born baby?

26. What name is given to the mother of twins?

27. Name the cultural dressing for Baganda women.

28. Who heads the local council committee?

29. How many members make the local council committee?

30. Who heads a clan?

31. What title is given to the king of Buganda?

32. Write L.D.U in full.

33. Name any one police station near your school.

34. Where can we report law breakers?

35. What is the main work of the police?

36. Name one place where medical services can be provided.

37. What is the main work of a doctor?

38. Draw a drum.

39. Write UPE in full.

40. Write down one activity people do to get money.

SECTION B

41. Give the meaning of the following terms.

a. A map _____

b. A picture _____

c. Name the map drawn below.



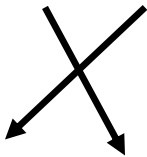
d. Identify any two elements of a good map.

(i) _____ (ii) _____

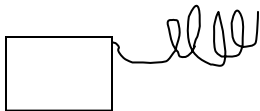
e. How is a title useful on a map?

41 (a) What are map symbols?

(b) Name the map symbol drawn below.



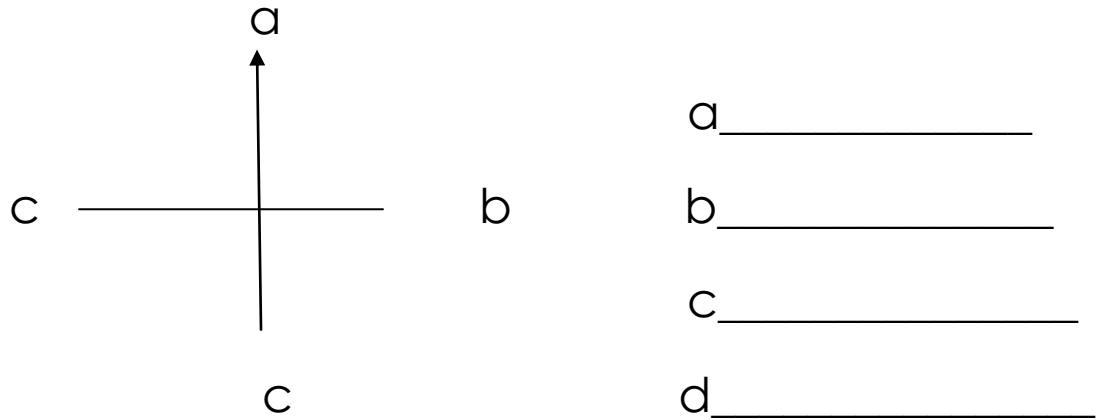






42(a) what are cardinal points?

b. Name the four major points found on a compass.



c. In which direction does the sun set?

(d) Give any two examples of people who use a compass during their daily work.

(i) _____

(ii) _____

43(a) what are physical features?

(b) Identify any two examples of physical features you know.

(i) _____

(ii) _____

44.(a) give the meaning of the following terms

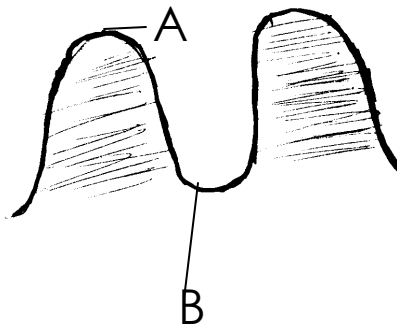
(i) Lake _____

(ii) A river _____

b. Name the largest lake in Uganda.

c. State any one danger of lakes to man.

45.(a) Name the land forms marked A and B on the diagram below.



A is _____

B is _____

b. Name any one important feature found on the following hills

(i) Kasubi hill _____

(ii) Mulago hill _____

(iii) Nakasero hill _____

46.(a) What is fishing?

(b) State any one method of fishing.

(c) Give any two ways of preserving fish

(i) _____

(ii) _____

(iii) _____

47.(a) What is an ethnic group?

(b) State any two examples of ethnic groups.

(i) _____ (ii) _____

(c) What is the main work of Bantu group?

(d) Name the language spoken by the following tribes.

(i) Baganda _____

(ii) Bagisu _____

(iii) iteso _____

(iv) Japadhola _____

48(a) what is culture?

(b) State any two examples of cultural practices

(i) _____

(ii) _____

49.(a) What is food?

(b) Give any two examples of food.

(i) _____

(ii) _____

(c) State any one reason why people eat food.

50(a) What are Economic activities?

(b) State any two examples of economic activities

(i) _____

(ii) _____

(c) Name any two examples of things made out of clay

(i) _____

(ii) _____

51 (a) Give any two examples of social services.

(i) _____

(ii) _____

(b) Identify any two modern means of communication

(i) _____

(ii) _____

(c) State any one local means of communication.
